

For each puzzle: Try to figure out how to arrange the towers so that in each row and each column, every tower is a different height, and every arrow points from a shorter tower to a taller tower. If you're able to do it, write the heights of the towers in the squares. If you think a puzzle is impossible, put an X.

<p>1</p> <table style="width: 100%; text-align: center; border-collapse: collapse;"> <tr> <td style="border: 1px solid black; width: 33px; height: 33px;"></td> <td style="border: 1px solid black; width: 33px; height: 33px; text-align: center;">1</td> <td style="border: 1px solid black; width: 33px; height: 33px;"></td> </tr> <tr> <td style="border: 1px solid black; width: 33px; height: 33px;"></td> <td style="border: 1px solid black; width: 33px; height: 33px;"></td> <td style="border: 1px solid black; width: 33px; height: 33px; text-align: center;">2</td> </tr> <tr> <td style="border: 1px solid black; width: 33px; height: 33px; text-align: center;">3</td> <td style="border: 1px solid black; width: 33px; height: 33px;"></td> <td style="border: 1px solid black; width: 33px; height: 33px;"></td> </tr> </table>		1				2	3			<p>2</p> <table style="width: 100%; text-align: center; border-collapse: collapse;"> <tr> <td style="border: 1px solid black; width: 33px; height: 33px;"></td> <td style="font-size: 20px;">→</td> <td style="border: 1px solid black; width: 33px; height: 33px;"></td> <td style="border: 1px solid black; width: 33px; height: 33px; text-align: center;">2</td> </tr> <tr> <td style="border: 1px solid black; width: 33px; height: 33px;"></td> <td style="border: 1px solid black; width: 33px; height: 33px;"></td> <td style="border: 1px solid black; width: 33px; height: 33px;"></td> <td style="border: 1px solid black; width: 33px; height: 33px;"></td> </tr> <tr> <td style="font-size: 20px;">↓</td> <td style="border: 1px solid black; width: 33px; height: 33px;"></td> <td style="border: 1px solid black; width: 33px; height: 33px;"></td> <td style="border: 1px solid black; width: 33px; height: 33px;"></td> </tr> </table>		→		2					↓				<p>3</p> <table style="width: 100%; text-align: center; border-collapse: collapse;"> <tr> <td style="border: 1px solid black; width: 33px; height: 33px;"></td> <td style="border: 1px solid black; width: 33px; height: 33px;"></td> <td style="border: 1px solid black; width: 33px; height: 33px;"></td> </tr> <tr> <td style="border: 1px solid black; width: 33px; height: 33px; text-align: center;">3</td> <td style="border: 1px solid black; width: 33px; height: 33px;"></td> <td style="border: 1px solid black; width: 33px; height: 33px; text-align: center;">2</td> </tr> <tr> <td style="border: 1px solid black; width: 33px; height: 33px;"></td> <td style="border: 1px solid black; width: 33px; height: 33px;"></td> <td style="font-size: 20px;">→</td> <td style="border: 1px solid black; width: 33px; height: 33px;"></td> </tr> </table>				3		2			→						
	1																																					
		2																																				
3																																						
	→		2																																			
↓																																						
3		2																																				
		→																																				
<p>4</p> <table style="width: 100%; text-align: center; border-collapse: collapse;"> <tr> <td style="border: 1px solid black; width: 33px; height: 33px;"></td> <td style="border: 1px solid black; width: 33px; height: 33px;"></td> <td style="font-size: 20px;">←</td> <td style="border: 1px solid black; width: 33px; height: 33px;"></td> </tr> <tr> <td style="font-size: 20px;">↑</td> <td style="border: 1px solid black; width: 33px; height: 33px;"></td> <td style="border: 1px solid black; width: 33px; height: 33px;"></td> <td style="border: 1px solid black; width: 33px; height: 33px; text-align: center;">3</td> </tr> <tr> <td style="border: 1px solid black; width: 33px; height: 33px;"></td> <td style="border: 1px solid black; width: 33px; height: 33px;"></td> <td style="border: 1px solid black; width: 33px; height: 33px;"></td> <td style="border: 1px solid black; width: 33px; height: 33px;"></td> </tr> <tr> <td style="font-size: 20px;">↓</td> <td style="border: 1px solid black; width: 33px; height: 33px;"></td> <td style="border: 1px solid black; width: 33px; height: 33px;"></td> <td style="border: 1px solid black; width: 33px; height: 33px;"></td> </tr> </table>			←		↑			3					↓				<p>5</p> <table style="width: 100%; text-align: center; border-collapse: collapse;"> <tr> <td style="border: 1px solid black; width: 33px; height: 33px;"></td> <td style="border: 1px solid black; width: 33px; height: 33px;"></td> <td style="border: 1px solid black; width: 33px; height: 33px; text-align: center;">2</td> </tr> <tr> <td style="border: 1px solid black; width: 33px; height: 33px;"></td> <td style="border: 1px solid black; width: 33px; height: 33px; text-align: center;">1</td> <td style="border: 1px solid black; width: 33px; height: 33px;"></td> </tr> <tr> <td style="border: 1px solid black; width: 33px; height: 33px; text-align: center;">2</td> <td style="border: 1px solid black; width: 33px; height: 33px;"></td> <td style="border: 1px solid black; width: 33px; height: 33px;"></td> </tr> </table>			2		1		2			<p>6</p> <table style="width: 100%; text-align: center; border-collapse: collapse;"> <tr> <td style="border: 1px solid black; width: 33px; height: 33px;"></td> <td style="border: 1px solid black; width: 33px; height: 33px;"></td> <td style="border: 1px solid black; width: 33px; height: 33px;"></td> </tr> <tr> <td style="border: 1px solid black; width: 33px; height: 33px;"></td> <td style="border: 1px solid black; width: 33px; height: 33px;"></td> <td style="font-size: 20px;">←</td> <td style="border: 1px solid black; width: 33px; height: 33px;"></td> </tr> <tr> <td style="border: 1px solid black; width: 33px; height: 33px;"></td> <td style="border: 1px solid black; width: 33px; height: 33px;"></td> <td style="border: 1px solid black; width: 33px; height: 33px;"></td> <td style="border: 1px solid black; width: 33px; height: 33px; text-align: center;">1</td> </tr> </table>						←					1
		←																																				
↑			3																																			
↓																																						
		2																																				
	1																																					
2																																						
		←																																				
			1																																			

For each puzzle: Try to figure out how to arrange the towers so that in each row and each column, every tower is a different height, and every arrow points from a shorter tower to a taller tower. If you're able to do it, write the heights of the towers in the squares. If you think a puzzle is impossible, put an X.

7

□	□	□
□	□ →	□
□	↑	□

8

□	□	□
□ →	↑	□
↑	□	□

9

□	□	□
↓	↑	□
□	←	↑

10

□	2	□	□
□	□	4	□
4	□	□	1
□	□	□	3

11

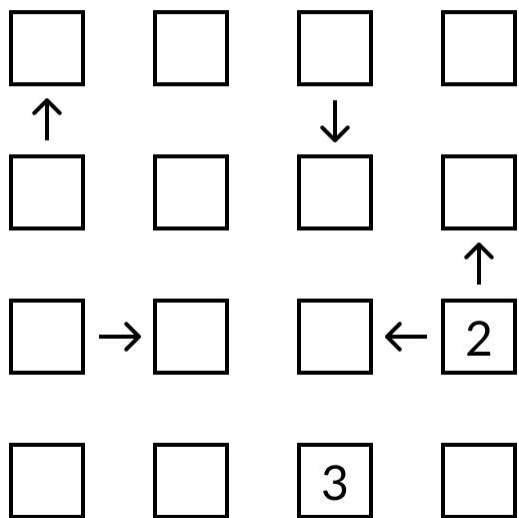
□	□	4	□
□	□	□	□
□	□	↓	□
□	←	□	□
1	□	2	□

12

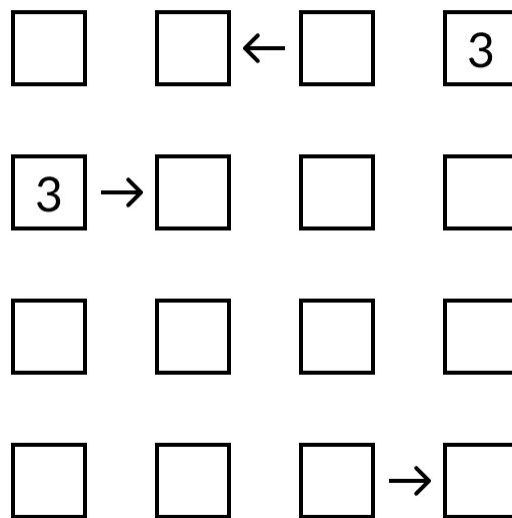
□	3	□	□
□	□	↓	4
□	□	1	□
□	□	□	↑

For each puzzle: Try to figure out how to arrange the towers so that in each row and each column, every tower is a different height, and every arrow points from a shorter tower to a taller tower. If you're able to do it, write the heights of the towers in the squares. If you think a puzzle is impossible, put an X.

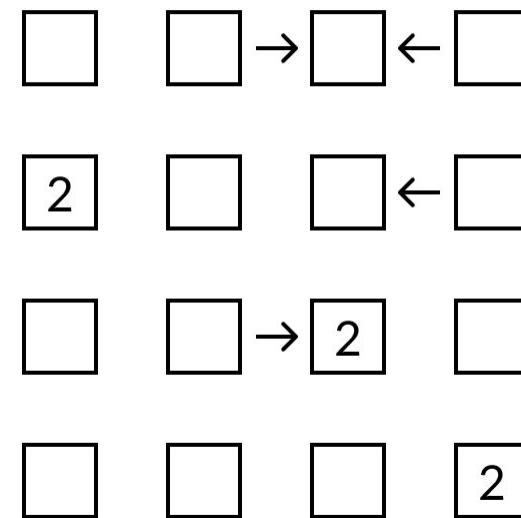
13



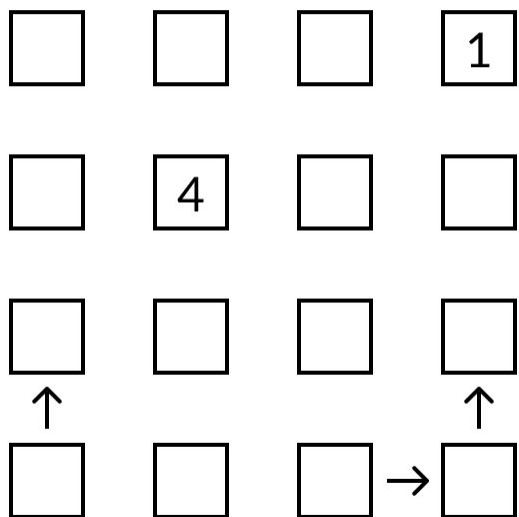
14



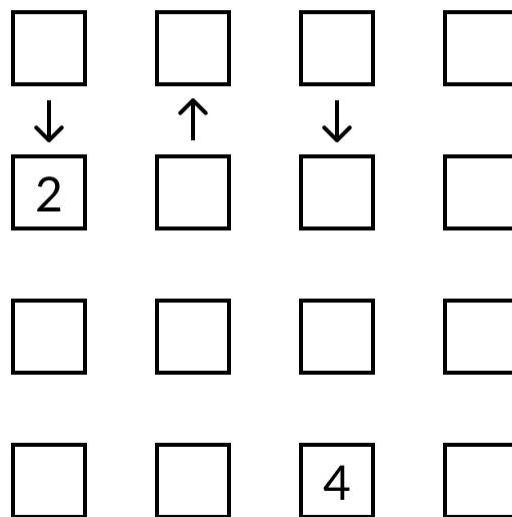
15



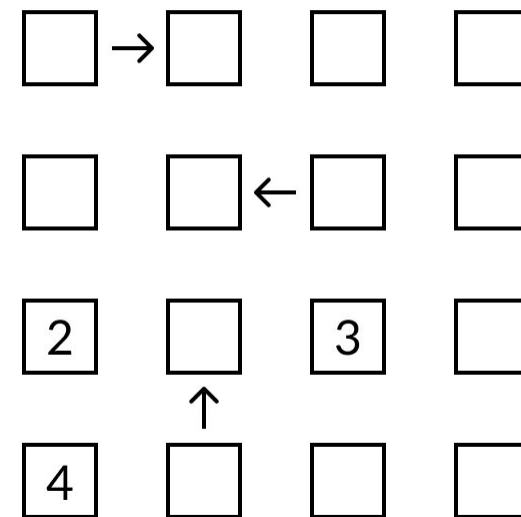
16



17

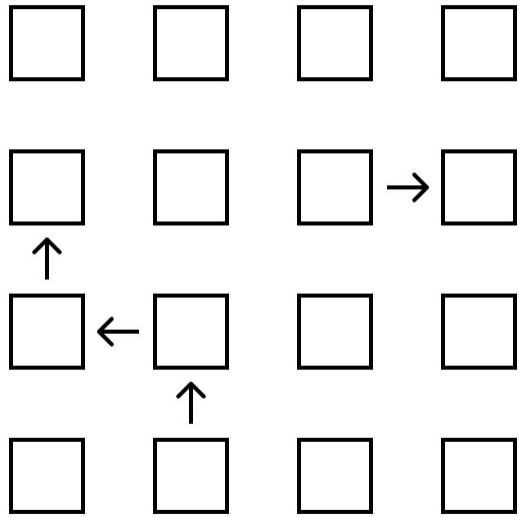


18

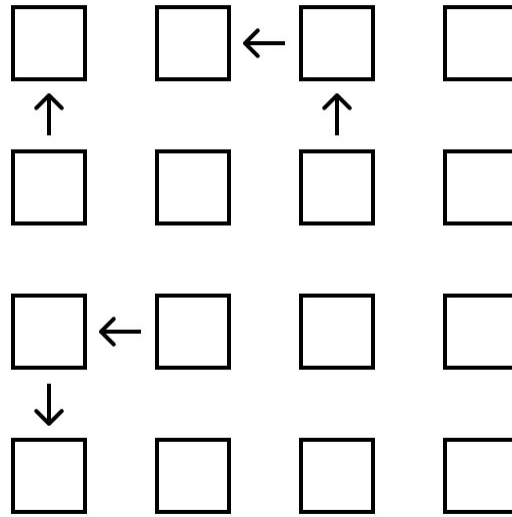


For each puzzle: Try to figure out how to arrange the towers so that in each row and each column, every tower is a different height, and every arrow points from a shorter tower to a taller tower. If you're able to do it, write the heights of the towers in the squares. If you think a puzzle is impossible, put an X.

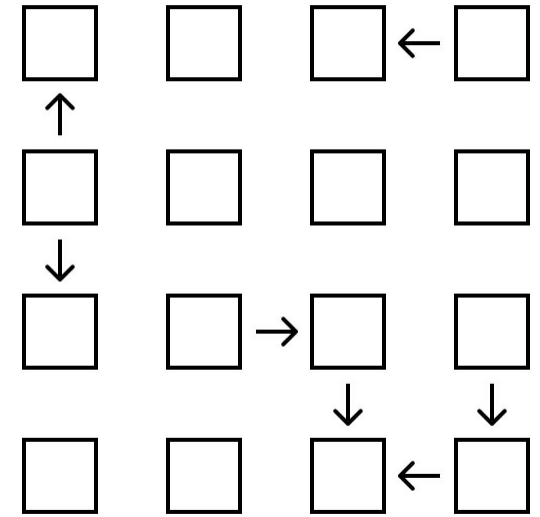
19



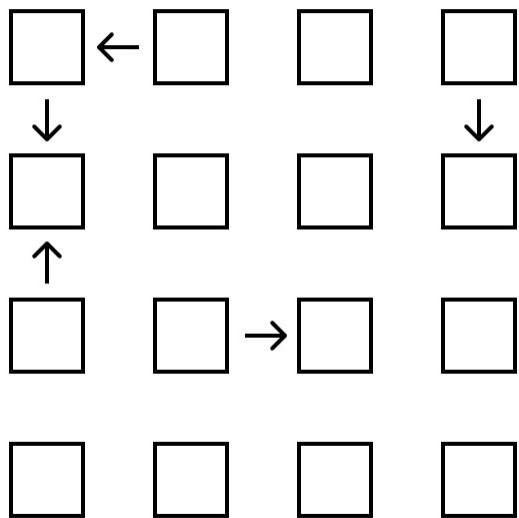
20



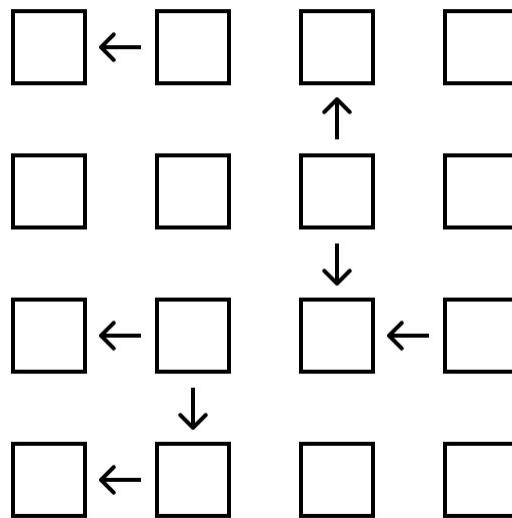
21



22



23



24

